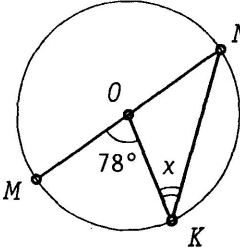
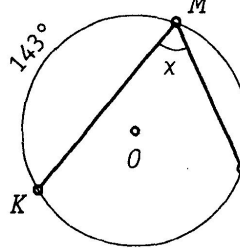
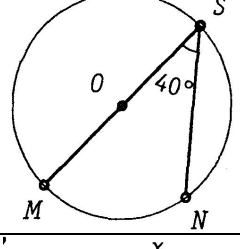
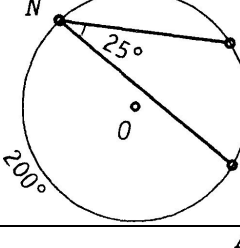
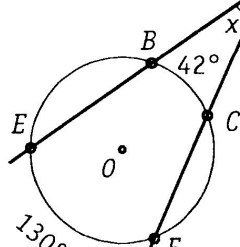
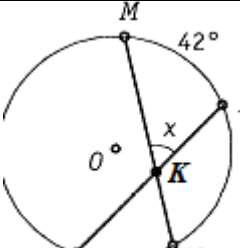
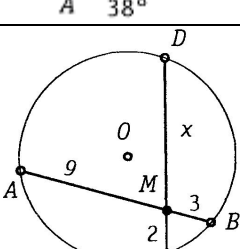


ВПИСАННЫЕ И ЦЕНТРАЛЬНЫЕ УГЛЫ

	Дано	Найти	Свойства	Решение	Ответ
1.		$\angle OKN$			
2.		$\angle KML$			
3.		\widehat{SN}			
4.		\widehat{MN}			
5.		$\angle BAC$			
6.		$\angle MKB$			
7.		DM			

	Дано	Найти	Свойства	Решение	Ответ
8.		\widehat{AB}			
9.		KM			
10.		OK			
11.		$\angle AMB$			
12.	<p>AB=8</p>	OK			
13.		$\angle NMP$			
14.		\widehat{DB}			